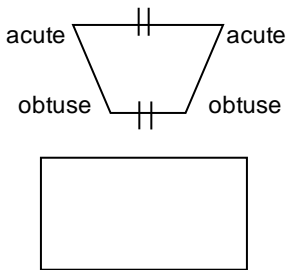
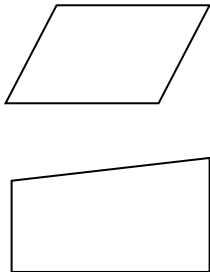


Name:

Weekly Math Review – Q3:8

Date:

Monday	Tuesday	Wednesday	Thursday																																																
Solve the expression. Use PEMDAS. $12.3 - 2.2 \times 8.4 \div 2 =$	Solve the expression. Use PEMDAS. $(4.8 + 2) \times 5.1 =$	Solve the expression. Use PEMDAS. $6.6 \div 2.2 + (3.2 + 4) =$	Solve the expression. Use PEMDAS. $[6.2 - 0.4 + (8 \times 3.2)] - 3.1 =$																																																
Find the product. $\frac{6}{9} \times \frac{5}{8} =$ $3.4 \times 3.1 =$	Find the product. $\frac{4}{7} \times \frac{9}{10} =$ $4.8 \times 9.88 =$	Find the product. $\frac{6}{8} \times \frac{5}{9} =$ $3.43 \times 8 =$	Find the product. $\frac{7}{8} \times \frac{4}{7} =$ $12.2 \times 0.8 =$																																																
Find the quotient. $\frac{7}{8} \div \frac{4}{9} =$ $0.9 \overline{)0.36}$	Find the quotient. $\frac{6}{9} \div \frac{3}{8} =$ $0.02 \overline{)0.86}$	Find the quotient. $\frac{8}{9} \div \frac{5}{8} =$ $0.5 \overline{)7.5}$	Find the quotient. $\frac{7}{9} \div \frac{1}{8} =$ $0.03 \overline{)0.063}$																																																
Add or subtract the fractions. $\frac{7}{8} \quad \frac{7}{8}$ $+ \frac{4}{9} \quad - \frac{4}{9}$	Add or subtract the fractions. $\frac{6}{9} \quad \frac{6}{9}$ $+ \frac{3}{8} \quad - \frac{3}{8}$	Add or subtract the fractions. $3\frac{8}{9} \quad 3\frac{8}{9}$ $+ 1\frac{5}{8} \quad - 1\frac{5}{8}$	Add or subtract the fractions. $8\frac{7}{9} \quad 8\frac{7}{9}$ $+ 4\frac{1}{8} \quad - 4\frac{1}{8}$																																																
Fill in the table. Find the rule. <table border="1"> <thead> <tr> <th>X(input)</th> <th>Y(output)</th> </tr> </thead> <tbody> <tr> <td>4</td> <td>3</td> </tr> <tr> <td>6</td> <td>5</td> </tr> <tr> <td>8</td> <td>7</td> </tr> <tr> <td>12</td> <td></td> </tr> <tr> <td></td> <td>13</td> </tr> </tbody> </table>	X(input)	Y(output)	4	3	6	5	8	7	12			13	Fill in the table. Find the rule. <table border="1"> <thead> <tr> <th>X(input)</th> <th>Y(output)</th> </tr> </thead> <tbody> <tr> <td>2</td> <td>5</td> </tr> <tr> <td>4</td> <td>9</td> </tr> <tr> <td>5</td> <td>11</td> </tr> <tr> <td>8</td> <td></td> </tr> <tr> <td></td> <td>21</td> </tr> </tbody> </table>	X(input)	Y(output)	2	5	4	9	5	11	8			21	Fill in the table. Find the rule. <table border="1"> <thead> <tr> <th>X(input)</th> <th>Y(output)</th> </tr> </thead> <tbody> <tr> <td>1</td> <td>4</td> </tr> <tr> <td>3</td> <td>10</td> </tr> <tr> <td>5</td> <td>16</td> </tr> <tr> <td>9</td> <td></td> </tr> <tr> <td></td> <td>34</td> </tr> </tbody> </table>	X(input)	Y(output)	1	4	3	10	5	16	9			34	Fill in the table. Find the rule. <table border="1"> <thead> <tr> <th>X(input)</th> <th>Y(output)</th> </tr> </thead> <tbody> <tr> <td>2</td> <td>7</td> </tr> <tr> <td>5</td> <td>22</td> </tr> <tr> <td>6</td> <td>27</td> </tr> <tr> <td>8</td> <td></td> </tr> <tr> <td></td> <td>47</td> </tr> </tbody> </table>	X(input)	Y(output)	2	7	5	22	6	27	8			47
X(input)	Y(output)																																																		
4	3																																																		
6	5																																																		
8	7																																																		
12																																																			
	13																																																		
X(input)	Y(output)																																																		
2	5																																																		
4	9																																																		
5	11																																																		
8																																																			
	21																																																		
X(input)	Y(output)																																																		
1	4																																																		
3	10																																																		
5	16																																																		
9																																																			
	34																																																		
X(input)	Y(output)																																																		
2	7																																																		
5	22																																																		
6	27																																																		
8																																																			
	47																																																		
Rule:	Rule:	Rule:	Rule:																																																
Label the shapes' angles and parallel lines. Example: 	Label the shapes' angles and parallel lines. 	Draw the shape and list its attributes. Regular polygon:  Square:  Rectangle:	Draw the shape and list its attributes. Rhombus:  Regular pentagon:  Hexagon:																																																

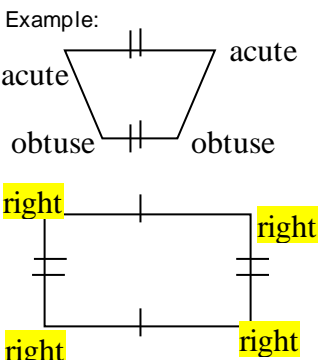
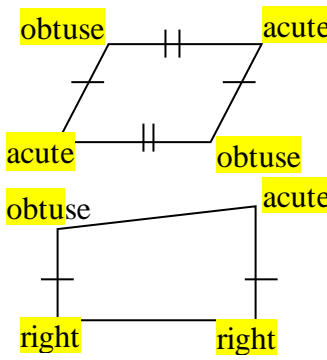
# My Work

Monday	Tuesday
Wednesday	Thursday

# My Progress

MONDAY	TUESDAY	WEDNESDAY	THURSDAY
# of questions _____	# of questions _____	# of questions _____	# of questions _____
# correct _____	# correct _____	# correct _____	# correct _____
I need more help with... _____	I need more help with... _____	I need more help with... _____	I need more help with... _____
_____	_____	_____	_____
_____	_____	_____	_____
_____	_____	_____	_____
_____	_____	_____	_____
_____	_____	_____	_____

Answer Key - Weekly Math Review – Q3:8

Monday	Tuesday	Wednesday	Thursday																																																
<p>Solve the expression. Use PEMDAS.</p> $12.3 - 2.2 \times 8.4 \div 2 =$ <b>3.06</b>	<p>Solve the expression. Use PEMDAS.</p> $(4.8 + 2) \times 5.1 =$ <b>34.68</b>	<p>Solve the expression. Use PEMDAS.</p> $6.6 \div 2.2 + (3.2 + 4) =$ <b>10.2</b>	<p>Solve the expression. Use PEMDAS.</p> $[6.2 - 0.4 + (8 \times 3.2)] - 3.1 =$ <b>28.3</b>																																																
<p>Find the product.</p> $\frac{6}{9} \times \frac{5}{8} = \frac{5}{12}$ $3.4 \times 3.1 =$ <b>10.54</b>	<p>Find the product.</p> $\frac{4}{7} \times \frac{9}{10} = \frac{18}{35}$ $4.8 \times 9.88 =$ <b>47.424</b>	<p>Find the product.</p> $\frac{6}{8} \times \frac{5}{9} = \frac{5}{12}$ $3.43 \times 8 =$ <b>27.44</b>	<p>Find the product.</p> $\frac{7}{8} \times \frac{4}{7} = \frac{1}{2}$ $12.2 \times 0.8 =$ <b>9.76</b>																																																
<p>Find the quotient.</p> $\frac{7}{8} \div \frac{4}{9} = 1\frac{31}{32}$ $0.9 \overline{)0.36}$ <b>0.4</b>	<p>Find the quotient.</p> $\frac{6}{9} \div \frac{3}{8} = 1\frac{7}{9}$ $0.02 \overline{)0.86}$ <b>43</b>	<p>Find the quotient.</p> $\frac{8}{9} \div \frac{5}{8} = 1\frac{19}{45}$ $0.5 \overline{)7.5}$ <b>15</b>	<p>Find the quotient.</p> $\frac{7}{9} \div \frac{1}{8} = 6\frac{2}{9}$ $0.03 \overline{)0.063}$ <b>2.1</b>																																																
<p>Add or subtract the fractions.</p> $\frac{7}{8} + \frac{4}{9} = 1\frac{23}{72}$ $\frac{7}{8} - \frac{4}{9} = \frac{31}{72}$	<p>Add or subtract the fractions.</p> $\frac{6}{9} + \frac{3}{8} = 1\frac{1}{24}$ $\frac{6}{9} - \frac{3}{8} = \frac{7}{24}$	<p>Add or subtract the fractions.</p> $3\frac{8}{9} + 1\frac{5}{8} = 5\frac{37}{72}$ $3\frac{8}{9} - 1\frac{5}{8} = 2\frac{19}{72}$	<p>Add or subtract the fractions.</p> $8\frac{7}{9} + 4\frac{1}{8} = 12\frac{65}{72}$ $8\frac{7}{9} - 4\frac{1}{8} = 4\frac{47}{72}$																																																
<p>Fill in the table. Find the rule.</p> <table border="1"> <thead> <tr> <th>X(input)</th> <th>Y(output)</th> </tr> </thead> <tbody> <tr><td>4</td><td>3</td></tr> <tr><td>6</td><td>5</td></tr> <tr><td>8</td><td>7</td></tr> <tr><td>12</td><td><b>11</b></td></tr> <tr><td><b>14</b></td><td>13</td></tr> </tbody> </table> <p>Rule: <b>n - 1</b></p>	X(input)	Y(output)	4	3	6	5	8	7	12	<b>11</b>	<b>14</b>	13	<p>Fill in the table. Find the rule:</p> <table border="1"> <thead> <tr> <th>X(input)</th> <th>Y(output)</th> </tr> </thead> <tbody> <tr><td>2</td><td>5</td></tr> <tr><td>4</td><td>9</td></tr> <tr><td>5</td><td>11</td></tr> <tr><td>8</td><td><b>17</b></td></tr> <tr><td><b>10</b></td><td>21</td></tr> </tbody> </table> <p>Rule: <b>n x 2 + 1</b></p>	X(input)	Y(output)	2	5	4	9	5	11	8	<b>17</b>	<b>10</b>	21	<p>Fill in the table. Find the rule:</p> <table border="1"> <thead> <tr> <th>X(input)</th> <th>Y(output)</th> </tr> </thead> <tbody> <tr><td>1</td><td>4</td></tr> <tr><td>3</td><td>10</td></tr> <tr><td>5</td><td>16</td></tr> <tr><td>9</td><td><b>28</b></td></tr> <tr><td><b>11</b></td><td>34</td></tr> </tbody> </table> <p>Rule: <b>n x 3 + 1</b></p>	X(input)	Y(output)	1	4	3	10	5	16	9	<b>28</b>	<b>11</b>	34	<p>Fill in the table. Find the rule:</p> <table border="1"> <thead> <tr> <th>X(input)</th> <th>Y(output)</th> </tr> </thead> <tbody> <tr><td>2</td><td>7</td></tr> <tr><td>5</td><td>22</td></tr> <tr><td>6</td><td>27</td></tr> <tr><td>8</td><td><b>37</b></td></tr> <tr><td><b>10</b></td><td>47</td></tr> </tbody> </table> <p>Rule: <b>n x 5 - 3</b></p>	X(input)	Y(output)	2	7	5	22	6	27	8	<b>37</b>	<b>10</b>	47
X(input)	Y(output)																																																		
4	3																																																		
6	5																																																		
8	7																																																		
12	<b>11</b>																																																		
<b>14</b>	13																																																		
X(input)	Y(output)																																																		
2	5																																																		
4	9																																																		
5	11																																																		
8	<b>17</b>																																																		
<b>10</b>	21																																																		
X(input)	Y(output)																																																		
1	4																																																		
3	10																																																		
5	16																																																		
9	<b>28</b>																																																		
<b>11</b>	34																																																		
X(input)	Y(output)																																																		
2	7																																																		
5	22																																																		
6	27																																																		
8	<b>37</b>																																																		
<b>10</b>	47																																																		
<p>Label the shapes' angles and parallel lines.</p> <p>Example:</p> 	<p>Label the shapes' angles and parallel lines.</p> 	<p>Draw the shape and list its attributes.</p> <p>Regular polygon:  1. all angles are congruent  2. all sides are congruent</p> <p>Square:  1. 4 congruent sides  2. 4 right angles  3. 2 sets of parallel lines</p> <p>Rectangle:  1. 2 sets of congruent lines  2. 2 sets of parallel lines  3. 4 right angles</p>	<p>Draw the shape and list its attributes.</p> <p>Rhombus:  1. 4 congruent sides  2. 2 sets of parallel lines  3. 2 acute angles  4. 2 obtuse angles</p> <p>Regular pentagon:  1. 5 congruent sides  2. 5 congruent angles</p> <p>Hexagon:  1. 6 sides  2. 6 angles</p>																																																